


# Reversible and Irreversible Changes



reversible





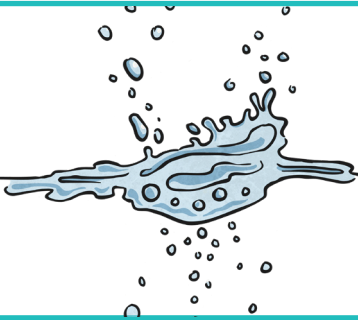
irreversible





Using the key above draw the correct arrow between the pictures. Write whether each change is a **reversible** or an **irreversible**.



Melting chocolate is a \_\_\_\_\_ change.



Freezing water is a \_\_\_\_\_ change.



Toasting bread is a \_\_\_\_\_ change.